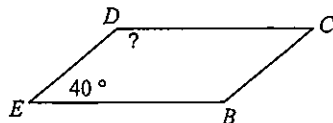


# Quiz 11 Retake Assignment

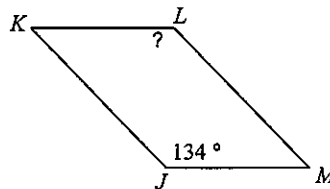
Date \_\_\_\_\_ Period \_\_\_\_\_

Find the measurement indicated in each parallelogram.

1)

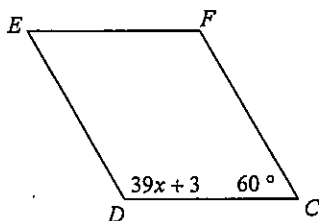


2)

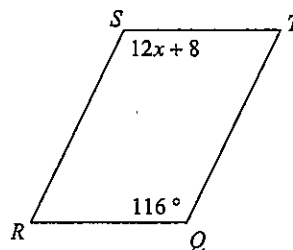


Solve for  $x$ . Each figure is a parallelogram.

3)

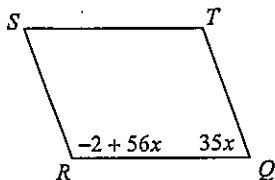


4)

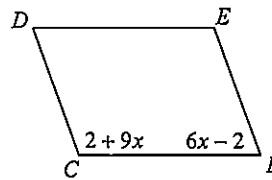


Find the measurement indicated in each parallelogram.

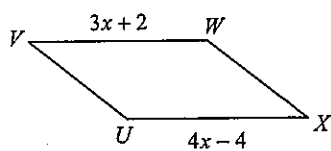
5) Find  $m\angle S$



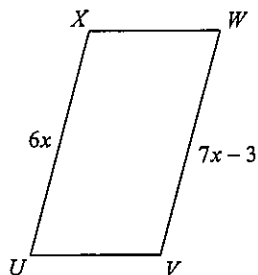
6) Find  $m\angle C$



7) Find  $VW$

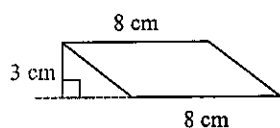


8) Find  $WV$

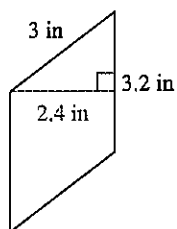


Find the area of each.

9)

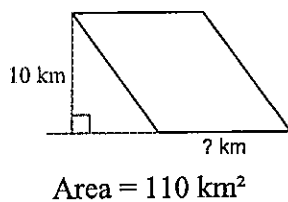


10)

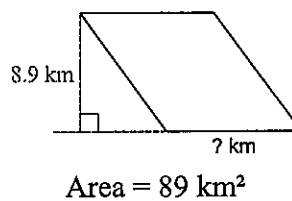


Find the missing measurement. Round your answer to the nearest tenth.

11)

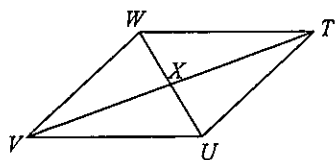


12)



Solve for  $x$ . Each figure is a parallelogram.

13)  $XW = 23$   
 $UX = 3x + 16$



14)  $UM = 15$   
 $MW = x + 4$

